

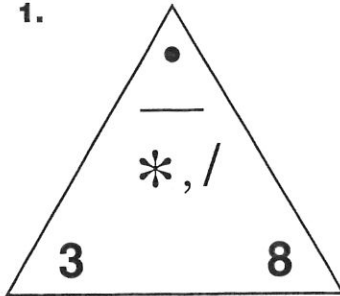
STUDY LINK
3•3

Fact Triangles

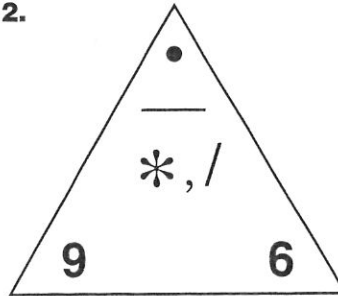


Complete these Multiplication/Division Fact Triangles.

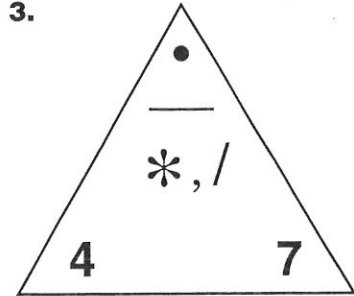
1.



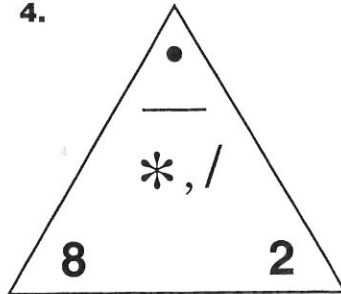
2.



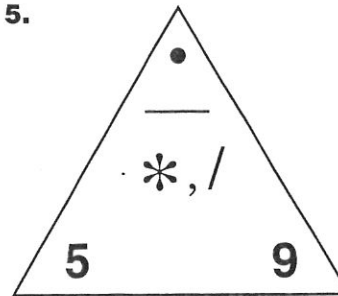
3.



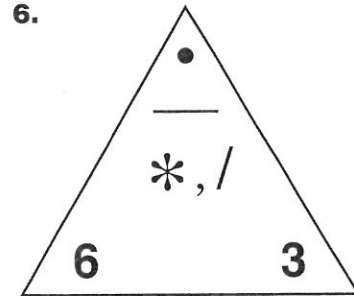
4.



5.



6.



Complete the statements.

7. _____ is 4 times as many as 10.

8. _____ is 5 times as many as 5.

9. _____ is 6 times as many as 8.

10. 63 is _____ times as many as 7.

11. _____ is 8 times as many as 8.

12. 42 is 7 times as many as _____.

Practice

13. Name 4 multiples of 7. _____, _____, _____, _____

14. List all the factors of 18. _____

15. List the factors of 18 that are prime. _____

16. List all the factor pairs of 20.

_____ and _____, _____ and _____, _____ and _____